


GREENWAYS SCHOOL




MORINDA-CHAMKAUR SAHIB ROAD, RURKI HEERAN



Holidays Home-Work



Session 2023-24



Class - VI



English



* Learn all textual question answers of chapters those we have already done.

* Practice of ch 1/2/3 of Grammar also .

* Practice on Focus on Exam on given worksheets no.

1. Reading section.....page no .9, 10 ,11 ,16,17,18,19

2. Grammar section page no.120 , 121, 122 ,123, 124, 142, 143, 144, 145,146 and 147

C Fill in the blanks with can or may.

◀ Application of Knowledge

Can is used to say that something is possible.

May is used to ask polite questions or to say that you are not sure.

Both are used to ask or grant permission.

May is more polite than can.

1. _____ you give this book to him?
2. I _____ visit my grandparents on Sunday.
3. They _____ go to see a movie after lunch.
4. _____ I come in please?
5. I _____ ask them to get a taxi for me.

D How can you help to keep your city clean? List four things that can be done by all of us.

◀ Critical Thinking

1. We should not throw garbage outside the house.
2. _____
3. _____
4. _____



Math



- (1) Do Chapter no. 4(Basic geometry idea) from NCERT (Ex. 4.1 to 4.6)
- (2.)Do. Activity 3 and 4 on lab manual.
- (3) one chart related with mathematics .

Science

Answer the following questions:

- 1.Explain 'Water does not provide nutrients, yet it is an important component of food.' Why?



- 2.Collect information about cattle feed and pet food. Find out the nutrients present in them



- 3.List all items known to you that float on water.Check and see if they will float on an oil or kerosene.
- 4.Pick five objects from the word box given below which are opaque and would sink in water.





O	S	T	P	L	E
A	T	L	E	E	R
C	O	I	N	A	A
O	N	K	C	F	S
A	E	E	I	W	E
L	L	Y	L	R	R

5. Observe different materials in and around your home. Group them on the basis of transparency, appearance, shape, colour, conductivity and materials of which these are made.

6. Read the story titled “Wise Farmer” and tick the correct option to complete the story.

A farmer was **sad/happy** to see his healthy wheat crop ready for harvest. He harvested the crops and left it under the **sun/rain** to dry the stalks. To separate the seeds from the bundles of the stalk he **handpicked/threshed** them. After gathering the seed grains he wanted to separate the stones and husk from it. His wife **winnowed/threshed** them to separate the husk and later **sieved/handpicked** to remove stones from it. She ground the wheat grains and **sieved/filtered** the flour. The wise farmer and his wife got a good price for the flour. Can you tell why ?

7.

To identify different materials which may be used to make an object.

Procedure : Observe the following objects around you and then complete the table given below.

Objects	Materials which can be used to make the object			
Table, Chair	Wood	Plastic	Metal	Cane
Utensils
Almirah
Wash basin
Flooring
School bag

8. Make a scrap book on Separation of Substances /Components of food.(any one)

9. Make a chart on Journey through different habitats.

10. Revise syllabus which were done in the class.

11. Complete your practical file/lab manual up to experiment 10.



Hindi



1. एक लेटरबॉक्स बनाए और उसके बारे में 5 पंक्तियां लिखें अपनी कॉपी पर।
2. पेड़ पौधे लगाते हुए फ़ोटो खींचें और अपनी कॉपी पर लगाए और उस पौधे के बारे में थोड़ी जानकारी लिखें। कोई भी दो पौधे अपने घर या आस पास लगाए।
3. अपनी व्याकरण की किताब के पेज नंबर
51,52,57,58,60,62,63,29,30,95,96,97 बुक में ही करें।
4. पाठ 1 से 4 के प्रश्न उत्तर याद करें।

Computer

- Make a Chart on Types of Memory (Roll no 1 to 8)
- Make a Chart on Units for measurement of memory (Roll no 9 to 17)
- Make a Chart on Functions of Operating System (Roll no 18 to 25)

Q1. Fill in the blanks.

World wide web

Internet

Computer

1. Two or more computers connected with each other is called _____ network.

2. We use _____ to search information.

3. WWW stands for _____.

Q2. Match the following.

1. WWW


(A) is the first page which appears when you open a website

2. Web browser

(B) is the largest collection of information on internet

3. Homepage

(C) lets you view different websites



Social Science

(Section - A) History



Q1. Who are archaeologists? what do they study?

Q2. Give at least five reasons why early people travelled from one part of the subcontinent to another?

Q3. Write the difference between manuscript and inscription?

Q4. Name the few sources of history.

(Section- B) Geography

Q1. What are Human- made satellite's? Name some Indian satellites.

Q2. Write The three characteristic of sun.

Q3. what is the difference between a planet and a star.

Q4. Draw and Name the planets in our solar system.

(Section- C) civics

Q1. Define Democracy?

Q2. What do you understand by inequality?

Q3. Write any five differences between Kerala and Ladakh.

Q4. Write any five points about Pashmina shawl.

(Section- D) Activity corner

Subject Enrichment (activity)

1. locate the following on an our line map of India.

Ladakh, Kerala, Ganga river

2. Write a note on Dr Bhimrao Ambedkar and also draw or paste his picture.



Punjabi



ਪਾਠ ਪੁਸਤਕ 'ਗੁਣਤਾਸ'

ਕਿਤਾਬ ਪੰਨਾ ਨੰਬਰ:- 25, 33, 46, 50, 56 ਅਤੇ 69 ਉਤੇ ਲਿਖਤ ਰਚਨਾਤਮਕ ਕਾਰਜ ਨੋਟ ਬੁੱਕ ਵਿੱਚ ਲਿਖੋ।

ਨੋਟ:- ਵਾਤਾਵਰਣ ਦਿਵਸ 5 ਜੂਨ ਤੇ 'ਤੇ ਆਪਣੇ ਘਰ ਦੇ ਨੇੜੇ ਛਾਂਦਾਰ ਬੂਟੇ ਲਗਾਓ ਤੇ ਤਸਵੀਰ ਖਿੱਚ ਕੇ ਸਕਰੈਪ ਬੁੱਕ ਵਿੱਚ ਪੇਸਟ ਕਰੋ।

