

GREENWAYS SCHOOL

MORINDA-CHAMKAUR SAHIB ROAD, RURKI HEERAN




Holidays Home-Work

Session 2023-24




Class - V



English

- * Learn all textual question answers of chapters those we have already done.
- * Practice of chapter 1 of Grammar also .
- * Practice on Grafalco writing book from page no. 1 to 10
- *Do some activities as follows:

A Look at the picture and answer the questions.



1. Choose the question that matches the given answer.
The crow is sitting on the windowsill.

- Where did the crow come from?
- What is the crow waiting for?
- Where is the crow sitting?
- Why is the crow sitting there?

2. Construct two sentences using the present continuous tense based on the picture.

3. Choose the adjective that best describes Father as a cook.
Construct a sentence using it.

- happy
- quiet
- good
- sincere

4. Choose the sentence that does not use the correct preposition based on the picture.

- Mother and Diya are seated at the table.
- Diya's books are on the table.
- There are some vessels near the stove.
- Amiya is playing in the carpet.

Social Science

1. Make a chart of 'Preamble of our Constitution'.
2. Make a model of 'Means of Transport'
3. Collect information about Historical place and prepare a report on it. Make a collage on 'Great Leaders'.
4. Explain the following on A4 size sheet.

- ❖ Latitudes
- ❖ Longitudes
- ❖ Globe

5. Collect the following information from the given states. Also paste pictures to supplement the information such as Capital, Language, Traditional Dress, Main Food, Festivals, Main Crops, Monuments, Tourist Spots, Industries.

- i) Himachal Pradesh
- ii) Punjab
- iii) Bhutan
- iv) Manipur
- v) Assam

Q6. How well do you know your country? Name the following and paste pictures. Also write a few lines on each of them.

- i) National Flag
- ii) National Emblem
- iii) National Animal
- iv) National Bird
- v) National Anthem
- vi) National Game
- vii) National Flower
- viii) National Fruit
- ix) National Currency

Q7. Take a political map of India and mark all the 28 States and 8 Union Territories in it. Learn the capitals of all the states and their capitals.

NOTE: All questions are to be done on coloured A-3 size sheet

Math

Do worksheet from mental mathematics :-

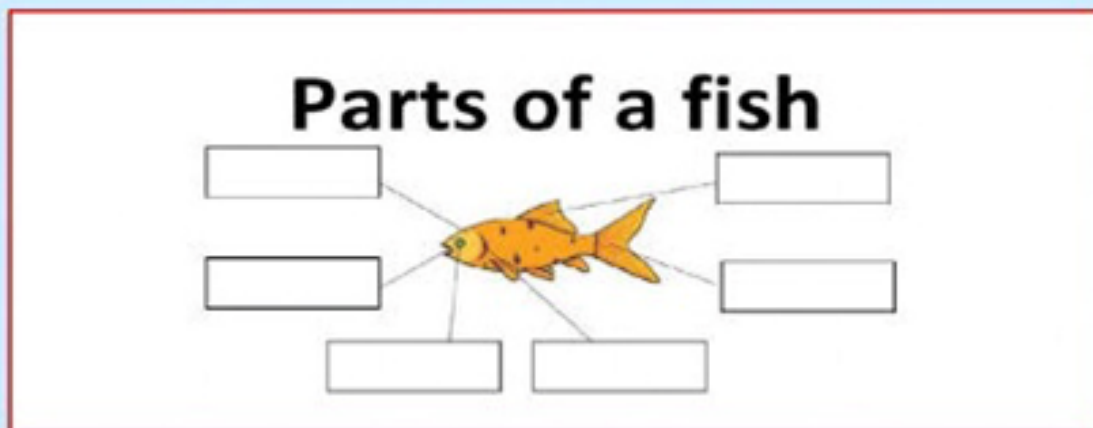
- (1) Large numbers :- worksheet 1,2,3,4.
- (2) operations involving large number :- worksheet 1 to 10.
- (3) one chart related with mathematics

Science

I. Match the following.

- | | |
|------------------|---------------------------------|
| 1. Live in group | Summer sleep |
| 2. Hibernation | Seasonal movement |
| 3. Adaptation | Elephants |
| 4. Aestivation | Special features and behaviours |
| 5. Migration | Winter sleep |

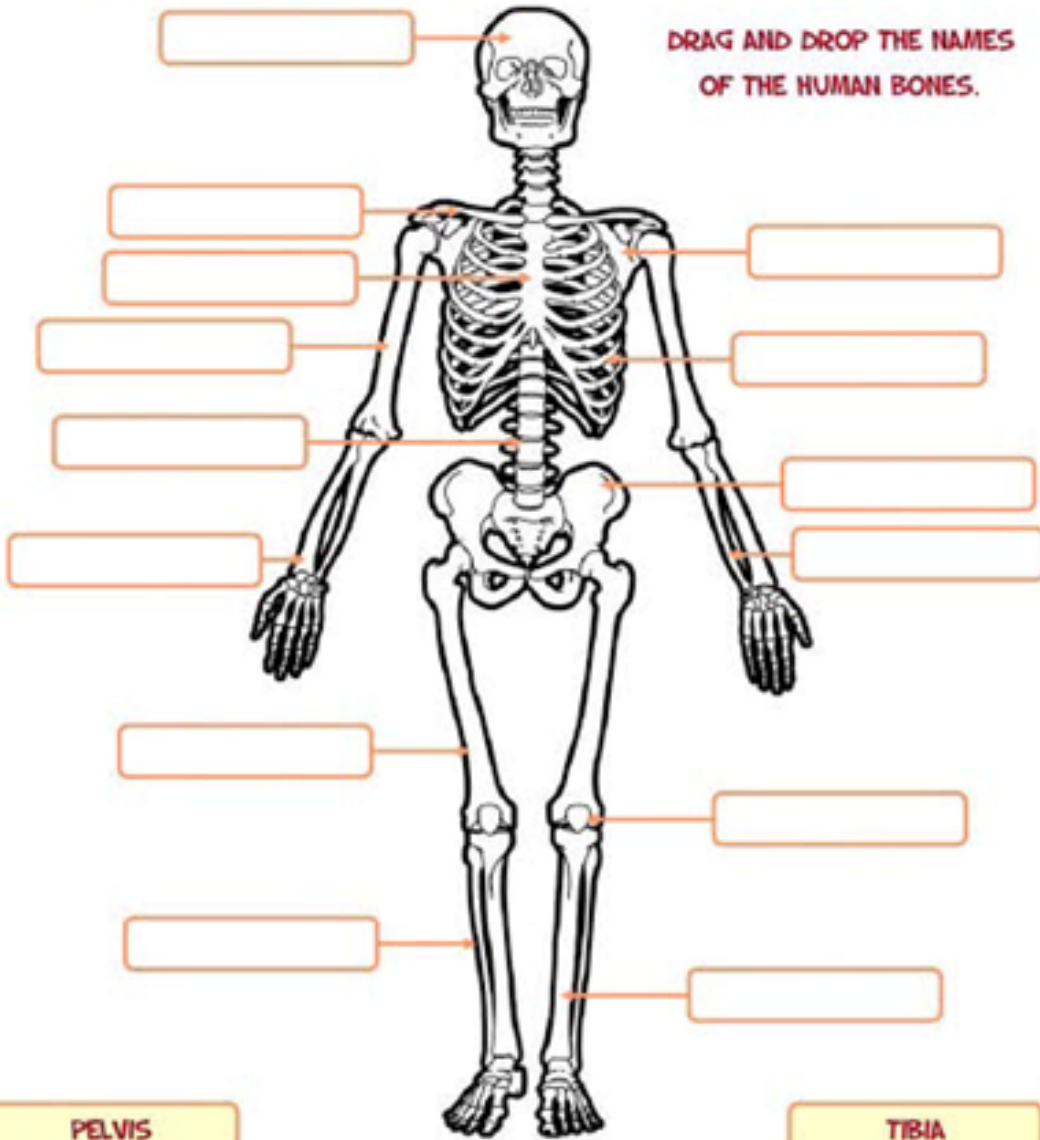
II. Label the parts of a fish.



Head Tail Fins Mouth Gills Eye

THE SKELETAL SYSTEM

DRAG AND DROP THE NAMES OF THE HUMAN BONES.



- | | | | |
|---------|--------|-----------|---------|
| PELVIS | | | TIBIA |
| CRANIUM | RADIUS | VERTEBRAE | ULNA |
| STERNUM | FIBULA | CLAVICLE | SCAPULA |
| RIBS | FEMUR | HUMERUS | PATELLA |



Hindi

1 रोल नंबर 1 से 10 विलोम शब्द पर चार्ट बनाए (चित्र के साथ) कोई भी 10 रोल नंबर 11 से 20 लिंग बदलो पर चार्ट बनाए (चित्र के साथ) कोई भी 10 रोल नंबर 21 से 31 वचन बदलो पर चार्ट बनाए (चित्र के साथ) कोई भी 10

- कोई भी बेकार समान से एक उपयोगी चीज़ बनाए जैसे (पेन स्टैंड, फ्रेम्स आदि)
- अपनी व्याकरण की किताब के पेज नंबर 31,32,38,43,44,123 बुक में ही करें।
- पाठ 1 से 7 के प्रश्न उत्तर याद करें।


Computer

- Make a chart on Types of Software (Roll no - 1 to 10)
- Make a chart on Generation of Computer (Roll no - 11 to 20)
- Make a chart on Types of Computer (Roll no - 21 to 31)

Choose the word that describes the pictures and type correct answer in the box:

Scanner	CPU	Keyboard	Web Camera
Printer	Mouse	Speaker	Light pen
Joystick	Monitor	Microphone	Pen Drive





Answer the following

1. Write the names of any two machines that need electricity to work:

a) _____ b) _____

2. Write the names of any two machines that need fuel to work:

a) _____ b) _____

3. Write the names of any two machines that need human power to work;

a) _____ b) _____

4. The _____ is used for typing words which can be seen on the monitor.
[Keyboard / Mouse]

5. The _____ keys have alphabet A - Z
[Numeric / Alphabet]



Punjabi

ਪਾਠ ਪੁਸਤਕ 'ਗੁਣਤਾਸ'

ਕਿਤਾਬ ਪੰਨਾ ਨੰਬਰ:- 23, 30, 35, 42, 48 ਅਤੇ 59 ਉੱਤੇ ਲਿਖਤ ਰਚਨਾਤਮਕ ਕਾਰਜ
ਨੋਟ ਬੁੱਕ ਵਿੱਚ ਲਿਖੋ।

ਨੋਟ:- ਵਾਤਾਵਰਣ ਦਿਵਸ 5 ਜੂਨ ਤੇ 'ਤੇ ਆਪਣੇ ਘਰ ਦੇ ਨੇੜੇ ਛਾਂਦਾਰ ਬੂਟੇ ਲਗਾਓ ਤੇ
ਤਸਵੀਰਾਂ ਖਿੱਚ ਕੇ ਸਕਰੈਪ ਬੁੱਕ ਵਿੱਚ ਪੇਸਟ ਕਰੋ।

